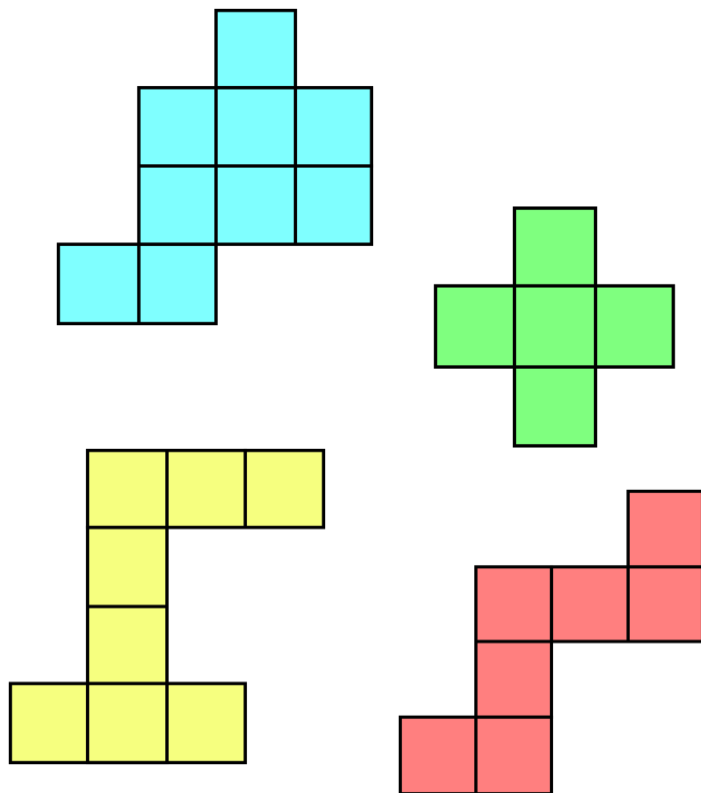


3.MD.C.6, 3.MD.D.8

Finding Perimeter and Area



Finding Perimeter and Area

Materials:

- Task Cards
- Dry erase marker (if cards are laminated) OR
- Recording sheet

Directions:

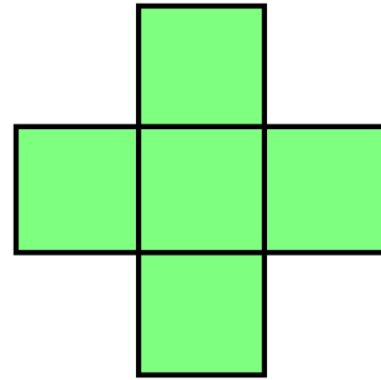
- 1) Choose a task card.
- 2) Figure out the perimeter and the area of the shape. Record your findings on the task card or on the recording sheet.
- 3) Choose another task card and continue to find the perimeter and area of each shape.

A




Perimeter _____ Area _____

B



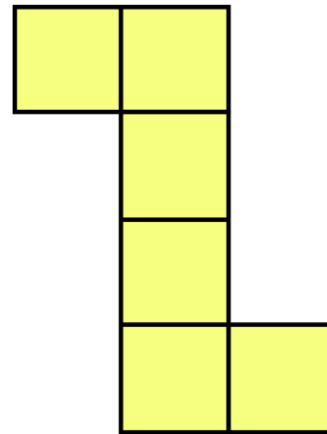
Perimeter _____ Area _____

C




Perimeter _____ Area _____

D



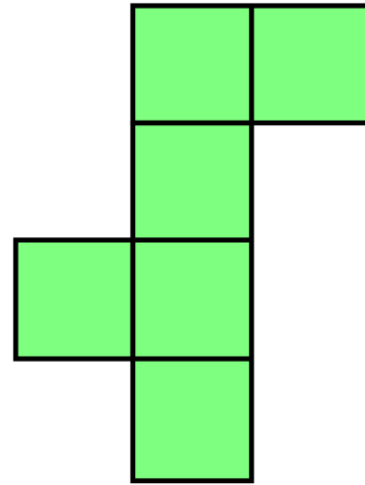
Perimeter _____ Area _____

E



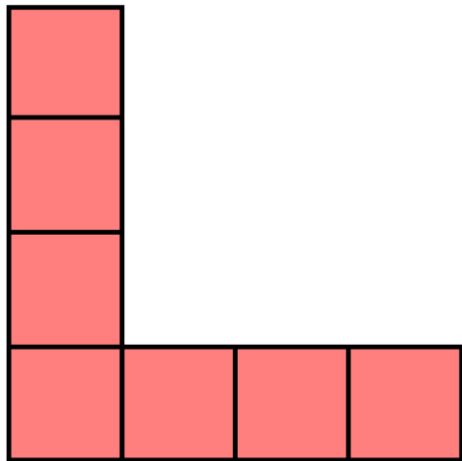
Perimeter _____ Area _____

F



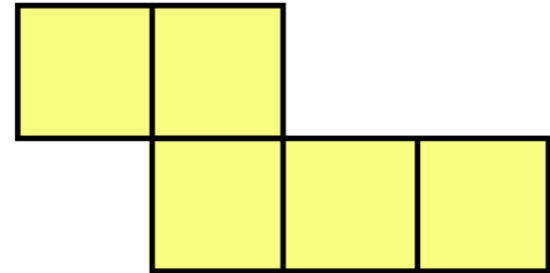
Perimeter _____ Area _____

G



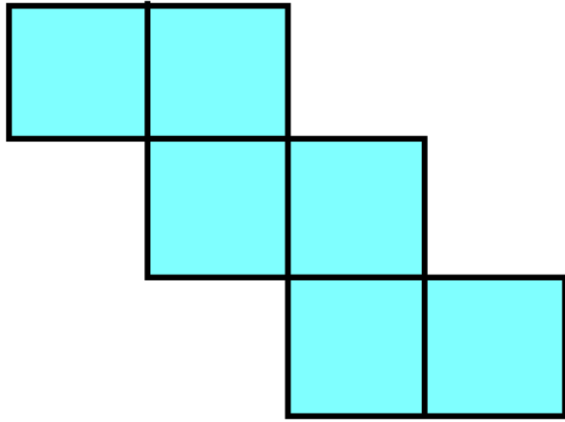
Perimeter _____ Area _____

H



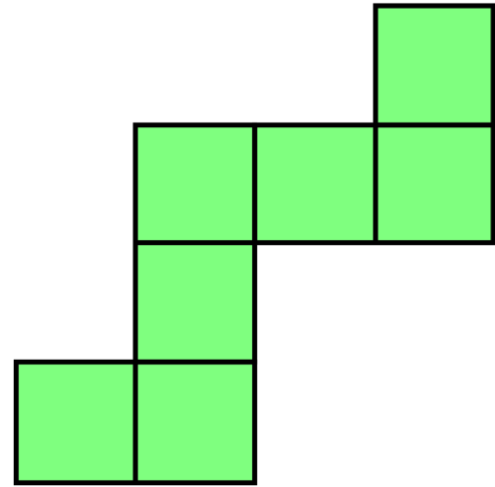
Perimeter _____ Area _____

I



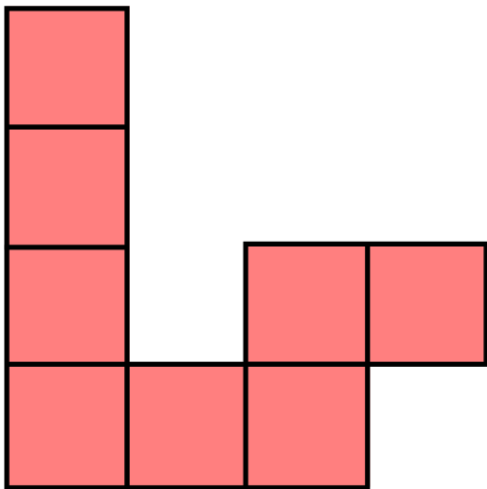
Perimeter _____ Area _____

J



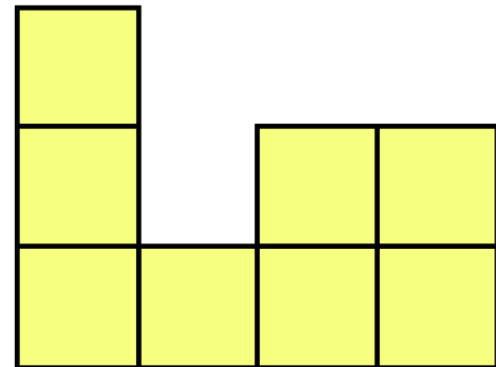
Perimeter _____ Area _____

K



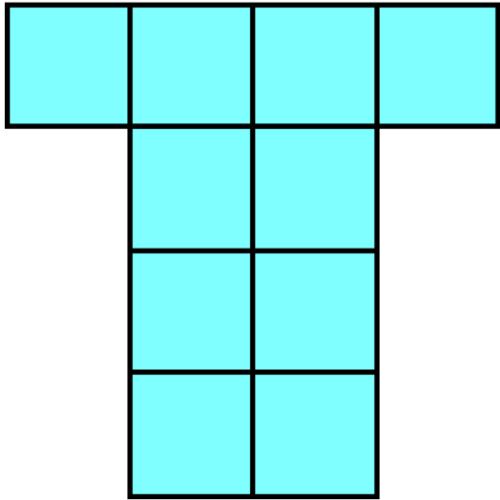
Perimeter _____ Area _____

L



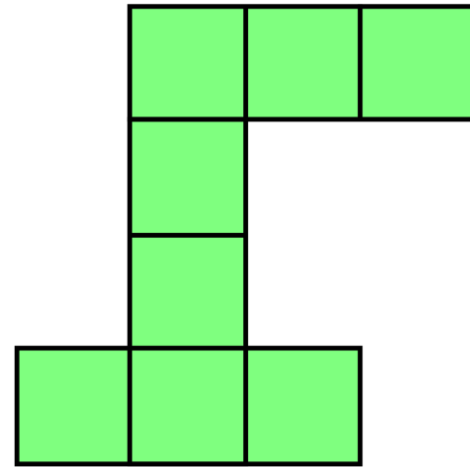
Perimeter _____ Area _____

M



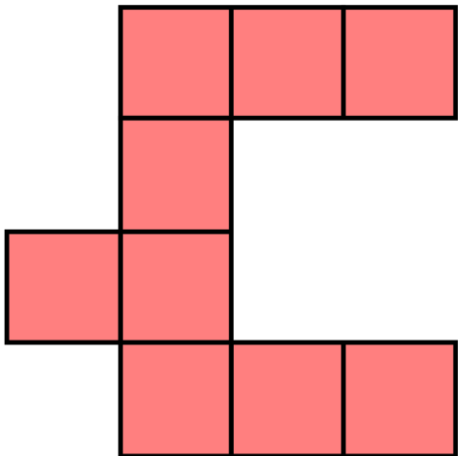
Perimeter _____ Area _____

N



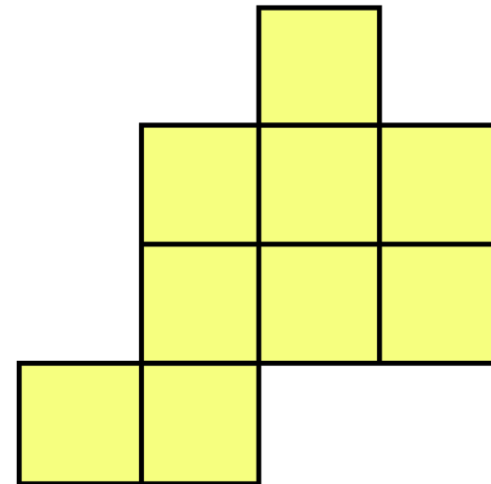
Perimeter _____ Area _____

O



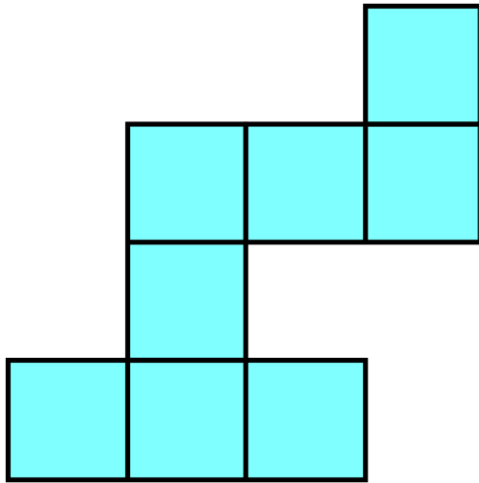
Perimeter _____ Area _____

P



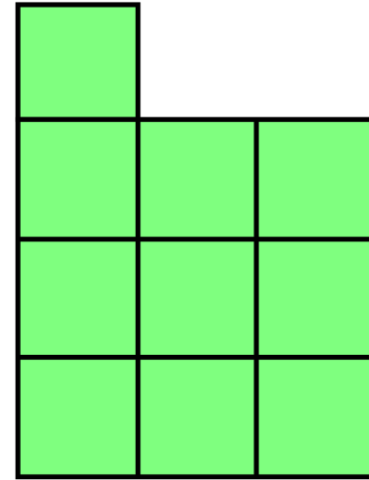
Perimeter _____ Area _____

Q



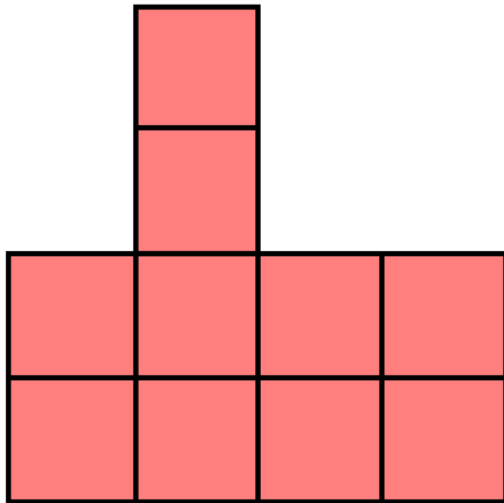
Perimeter _____ Area _____

R



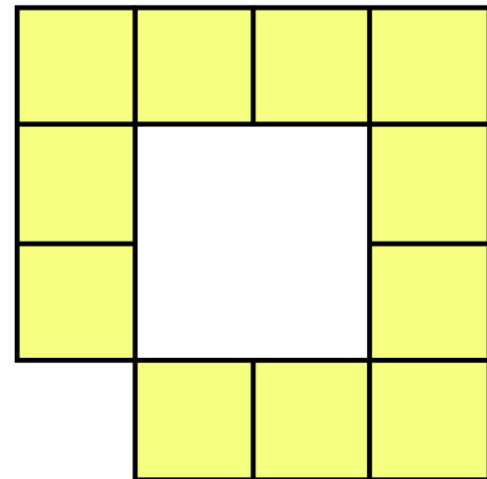
Perimeter _____ Area _____

S



Perimeter _____ Area _____

T



Perimeter _____ Area _____

Name _____ Date _____

Recording Sheet - Finding Perimeter and Area

A. perimeter _____ area _____	K. perimeter _____ area _____
B. perimeter _____ area _____	L. perimeter _____ area _____
C. perimeter _____ area _____	M. perimeter _____ area _____
D. perimeter _____ area _____	N. perimeter _____ area _____
E. perimeter _____ area _____	O. perimeter _____ area _____
F. perimeter _____ area _____	P. perimeter _____ area _____
G. perimeter _____ area _____	Q. perimeter _____ area _____
H. perimeter _____ area _____	R. perimeter _____ area _____
I. perimeter _____ area _____	S. perimeter _____ area _____
J. perimeter _____ area _____	T. perimeter _____ area _____

Graphics and Fonts

